



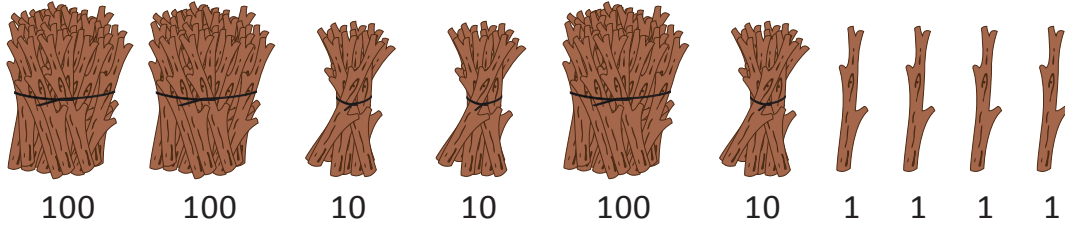
NAME _____

DATE _____

BUNDLE AND COUNT

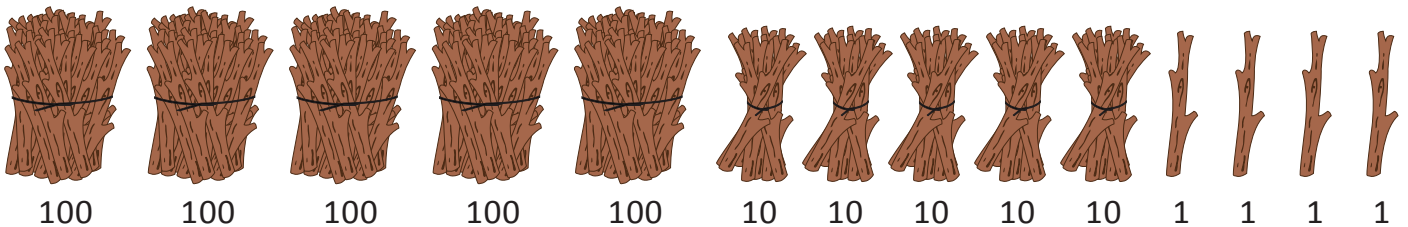
Count the objects in bundles by using ones, tens and hundreds.

1. a) Naseem bundled her sticks in hundreds, tens and ones.



How many sticks does Naseem have? ____.

1. b) Draw 2 more hundreds and 2 more tens. Count and write how many sticks Begum has now?




Naseem has now ____ sticks.

2. a) Reeta put her stickers in hundreds, tens and ones in small tins. Count and Write how many stickers that Reeta has now?



How many stickers does Reeta has now ____.

2. b) Draw 4 more hundreds and 4 more tens. Count and write how many stickers Reeta has now?



Reeta has now ____ stickers.